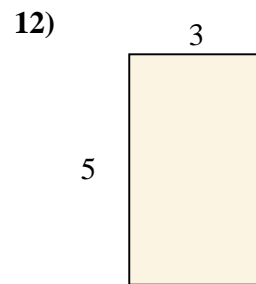
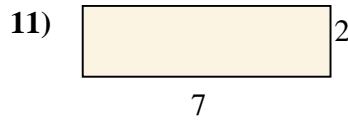
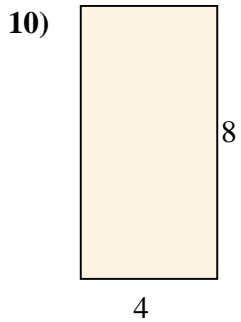

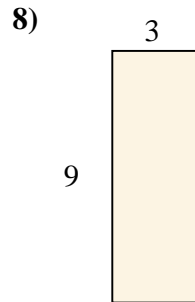
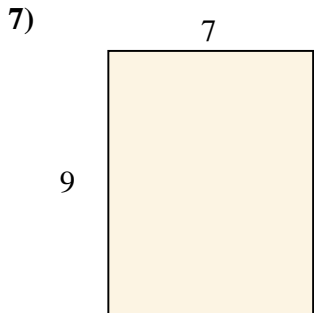
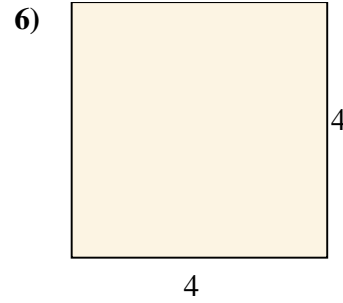
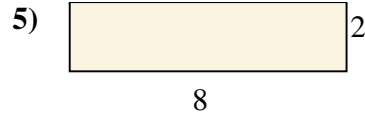
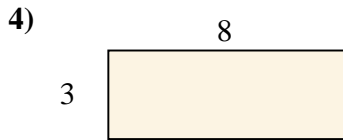
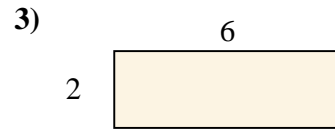
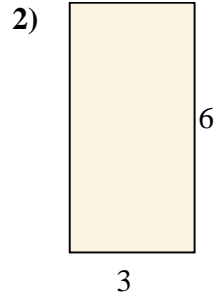
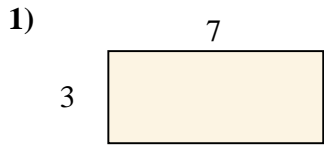




Find the area (in cm) of the rectangle shown.

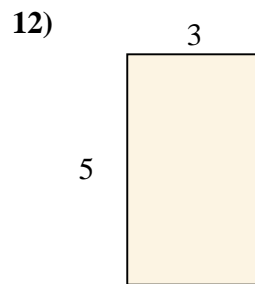
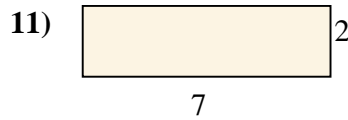
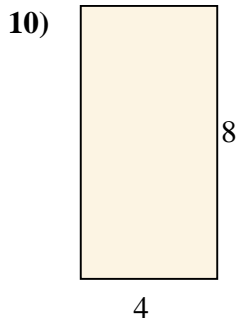

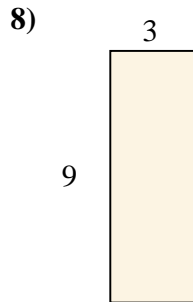
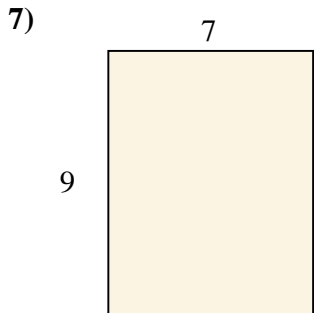
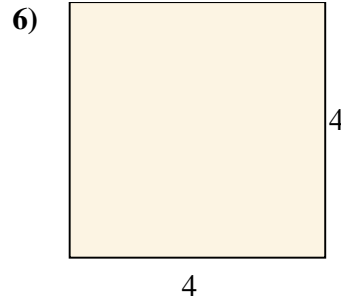
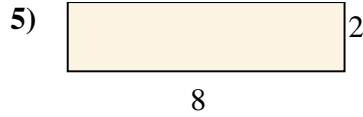
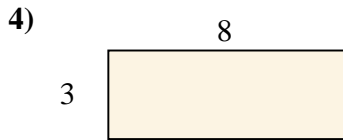
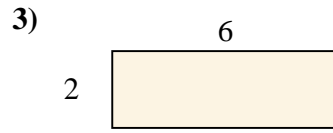
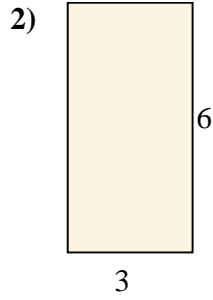
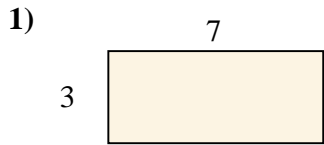


Answers

- 1. \_\_\_\_\_
- 2. \_\_\_\_\_
- 3. \_\_\_\_\_
- 4. \_\_\_\_\_
- 5. \_\_\_\_\_
- 6. \_\_\_\_\_
- 7. \_\_\_\_\_
- 8. \_\_\_\_\_
- 9. \_\_\_\_\_
- 10. \_\_\_\_\_
- 11. \_\_\_\_\_
- 12. \_\_\_\_\_



Find the area (in cm) of the rectangle shown.



Answers

1. 21

2. 18

3. 12

4. 24

5. 16

6. 16

7. 63

8. 27

9. 16

10. 32

11. 14

12. 15